

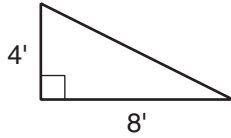
STUDY LINK
8•7

Areas of Triangles



Find the area of each triangle.

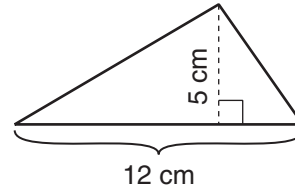
1.



Number model: _____

Area = _____ square feet

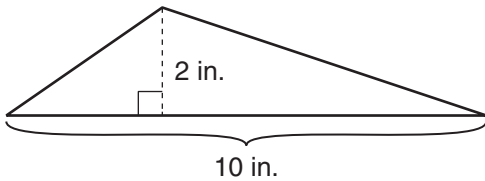
2.



Number model: _____

Area = _____ square cm

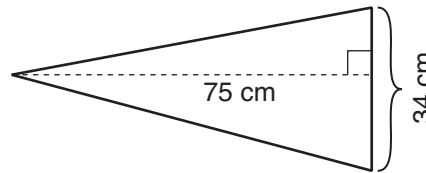
3.



Number model: _____

Area = _____ square in.

4.



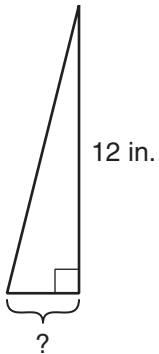
Number model: _____

Area = _____ square cm

Try This

The area of each triangle is given. Find the length of the base.

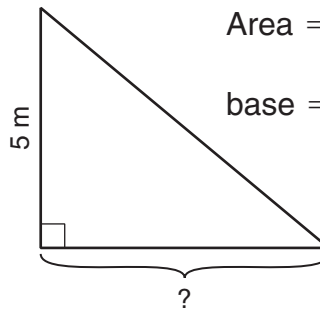
5.



Area = 18 in^2

base = _____ in.

6.



Area = 15 m^2

base = _____ m

Practice

7. 18, _____, _____, 45, _____, 63, _____

8. _____, 16, _____, 32, _____, _____, 56