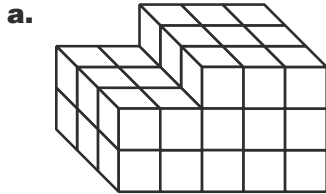
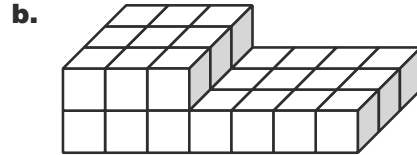




1. Find the volume of each stack of centimeter cubes.

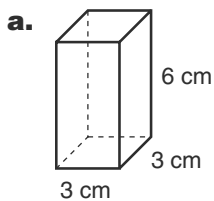


Volume = \_\_\_\_\_  $\text{cm}^3$



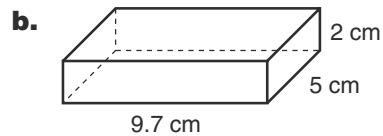
Volume = \_\_\_\_\_  $\text{cm}^3$

2. Calculate the volume of each rectangular prism.



Number model: \_\_\_\_\_

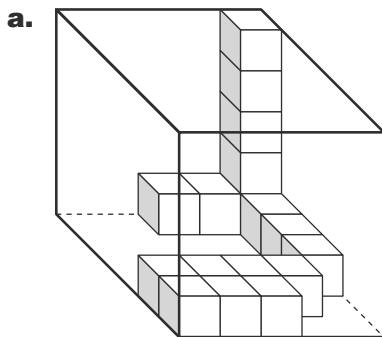
Volume = \_\_\_\_\_  $\text{cm}^3$



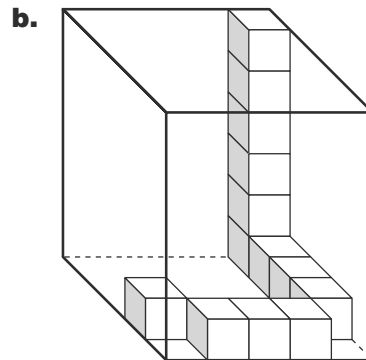
Number model: \_\_\_\_\_

Volume = \_\_\_\_\_  $\text{cm}^3$

3. What is the total number of cubes needed to completely fill each box?



\_\_\_\_\_ cubes



\_\_\_\_\_ cubes

## Practice

4.  $-65 + 16 =$  \_\_\_\_\_

5. \_\_\_\_\_  $= -21 + (-19)$

6. \_\_\_\_\_  $= 84 + (-55)$

7.  $-16 + 89 =$  \_\_\_\_\_