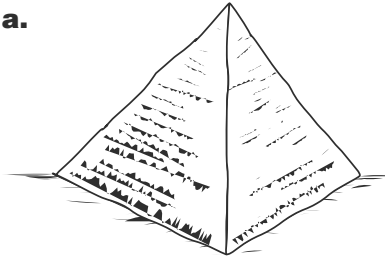




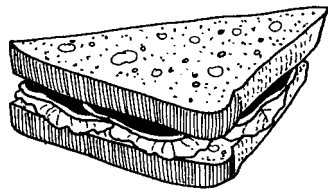


STUDY LINK
11·2

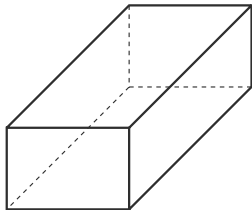
Solids



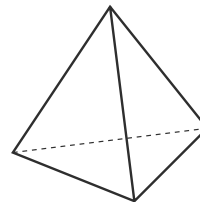
1. The pictures below show objects that are shaped approximately like geometric solids. Identify each object as one of the following: **cylinder**, **cone**, **sphere**, **triangular prism**, **square pyramid**, or **rectangular prism**.

<p>a.</p>  <p>Type: _____ _____</p>	<p>b.</p>  <p>Type: _____ _____</p>	<p>c.</p>  <p>Type: _____ _____</p>
<p>d.</p>  <p>Type: _____ _____</p>	<p>e.</p>  <p>Type: _____ _____</p>	<p>f.</p>  <p>Type: _____ _____</p>

2. Mark Xs on the vertices of the rectangular prism.



3. How many edges does the tetrahedron have? _____ edges



Practice

4. Circle the numbers that are multiples of 7. 132 7,000 63 560 834 91

5. Circle the numbers that are multiples of 12. 24 120 38 600 100 75